

Stærðfræði

B - 1

3

1 + 2
2 + 1

+
+

3 + 2

+
+

+
+





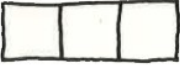

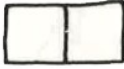


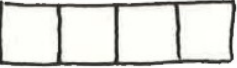
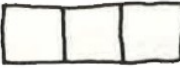

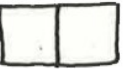



- + -

+
+

+
+

- + -

Nafn: _____


 1	+	 2		 _	+	 _
 _	+	 _		 _	+	 _
 _	+	 _		 _	+	 _
 _	+	 _		 _	+	 _

$3 + 1 = _$ $2 + 1 = _$ $3 + 2 = _$


$1 + 3 = _$ $1 + 2 = _$ $2 + 3 = _$



<u>5</u>	<u>0</u>	<u>4</u>	<u>1</u>	<u>2</u>	<u>0</u>
+0	+5	+1	+4	+0	+2













$3 + 2 = _$ $1 + 1 = _$
 $0 + 0 = _$ $4 + 1 = _$ $1 + 3 = _$
 $1 + 2 = _$ $4 + 0 = _$
 $0 + 4 = _$ $3 + 1 = _$
 $1 + 4 = _$ $2 + 2 = _$
 $2 + 3 = _$ $0 + 5 = _$
 $5 + 0 = _$ $2 + 1 = _$
 $0 + 1 = _$ $3 + 0 = _$



Litaðu



























  $2 + 3 = \underline{\quad}$	  $1 + 4 = \underline{\quad}$	  $2 + 1 = \underline{\quad}$
  $3 + 2 = \underline{\quad}$	  $4 + 1 = \underline{\quad}$	  $1 + 2 = \underline{\quad}$

$2 + 1 = \underline{\quad}$	$3 + 2 = \underline{\quad}$	$4 + 1 = \underline{\quad}$
$1 + 2 = \underline{\quad}$	$2 + 3 = \underline{\quad}$	$1 + 4 = \underline{\quad}$

$\begin{array}{r} 3 \\ +1 \\ \hline \end{array}$	$\begin{array}{r} 1 \\ +3 \\ \hline \end{array}$	$\begin{array}{r} 0 \\ +2 \\ \hline \end{array}$	$\begin{array}{r} 2 \\ +0 \\ \hline \end{array}$	$\begin{array}{r} 2 \\ +1 \\ \hline \end{array}$	$\begin{array}{r} 1 \\ +2 \\ \hline \end{array}$
--	--	--	--	--	--

  $3 + 1 = \underline{\quad}$	  $2 + \underline{\quad} = \underline{\quad}$	  $\underline{\quad} + \underline{\quad} = \underline{\quad}$
  $\underline{\quad} + \underline{\quad} = \underline{\quad}$	  $\underline{\quad} + \underline{\quad} = \underline{\quad}$	  $\underline{\quad} + \underline{\quad} = \underline{\quad}$
  $\underline{\quad} + \underline{\quad} = \underline{\quad}$	  $\underline{\quad} + \underline{\quad} = \underline{\quad}$	  $\underline{\quad} + \underline{\quad} = \underline{\quad}$
 $3 + \underline{\quad} = \underline{\quad}$	  $\underline{\quad} + \underline{\quad} = \underline{\quad}$	 $\underline{\quad} + \underline{\quad} = \underline{\quad}$

$2 + 2 = \underline{\quad}$

$2 + 0 = \underline{\quad}$

$3 + 1 = \underline{\quad}$

$1 + 1 = \underline{\quad}$

$2 + 1 = \underline{\quad}$

$3 + 2 = \underline{\quad}$



$5 + 0 = \underline{\quad}$

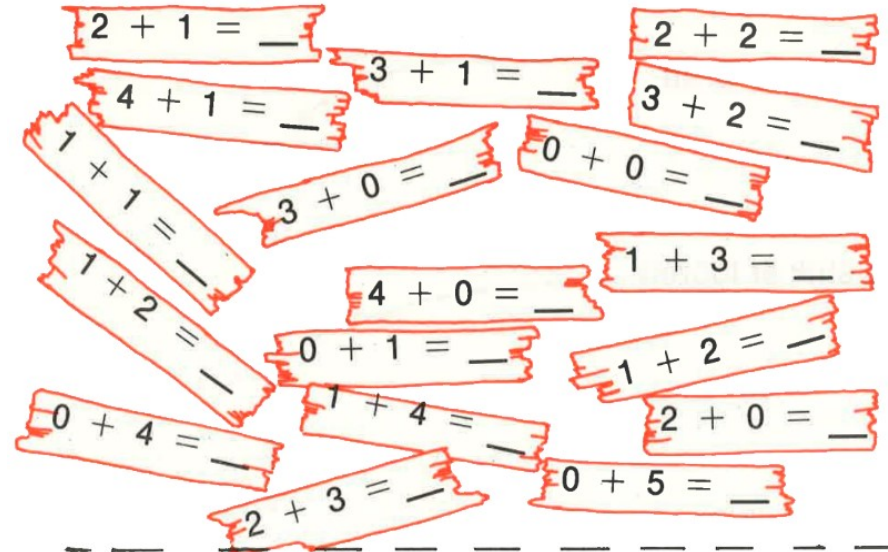
$1 + 2 = \underline{\quad}$

$0 + 4 = \underline{\quad}$

$1 + 3 = \underline{\quad}$

$2 + 3 = \underline{\quad}$


$3 + 0 = \underline{\quad}$







$2 + 1 = 3$



Litaðu svæðin



- Hve margir?
-  Gult _____
 -  Blátt _____
 -  Grænt _____
 -  Rautt _____

$\begin{array}{r} 2 \\ +1 \\ \hline \end{array}$	$\begin{array}{r} 4 \\ +1 \\ \hline \end{array}$	$\begin{array}{r} 5 \\ +0 \\ \hline \end{array}$	$\begin{array}{r} 3 \\ +2 \\ \hline \end{array}$	$\begin{array}{r} 2 \\ +2 \\ \hline \end{array}$
--	--	--	--	--

$\begin{array}{r} 0 \\ +0 \\ \hline \end{array}$	$\begin{array}{r} 2 \\ +3 \\ \hline \end{array}$	$\begin{array}{r} 1 \\ +4 \\ \hline \end{array}$	$\begin{array}{r} 1 \\ +2 \\ \hline \end{array}$	$\begin{array}{r} 0 \\ +2 \\ \hline \end{array}$
--	--	--	--	--