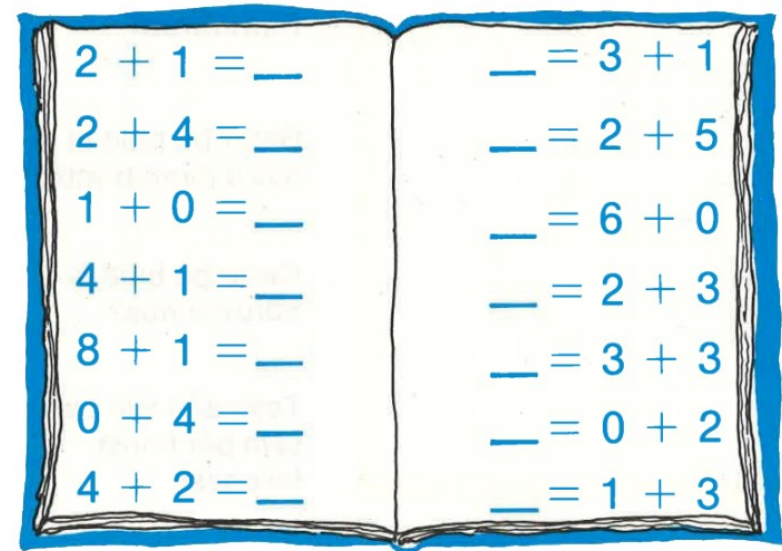
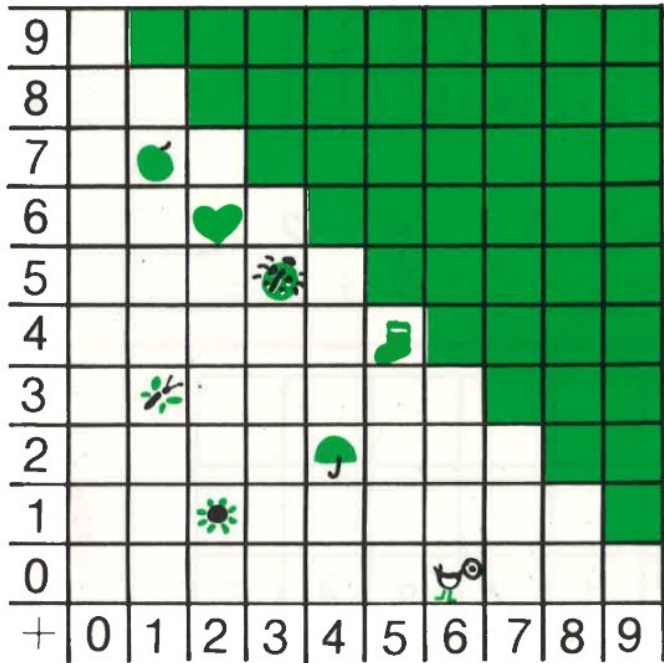



Stærðfræði

B - 4



Hvaða blóm eru eins?



5	4	0	6	2	0
<u>+1</u>	<u>+3</u>	<u>+2</u>	<u>+3</u>	<u>+6</u>	<u>+9</u>

7	2	1	3	3	4
<u>+1</u>	<u>+6</u>	<u>+5</u>	<u>+4</u>	<u>+6</u>	<u>+5</u>

í á að vera _____

í á að vera _____

í á að vera _____

í á að vera _____

í á að vera _____

í á að vera _____

í á að vera _____

í á að vera _____

Nafn: _____

6
+
+

8
+
+

+
+

+
+

+
+

+
+

2								
+	0	1	2	3	4	5	6	7



$$2 + 2 = \underline{\quad}$$

$$6 + 2 = \underline{\quad}$$

$$4 + 2 = \underline{\quad}$$

$$7 + 2 = \underline{\quad}$$

4						
3						
+	0	1	2	3	4	5



$$3 + 3 = \underline{\quad}$$

$$5 + 4 = \underline{\quad}$$

$$3 + 2 = \underline{\quad}$$

$$2 + 2 = \underline{\quad}$$

$$5 + 3 = \underline{\quad}$$


3							
2							
+	0	1	2	3	4	5	6



5 = ___ + ___
 4 = ___ + ___
 7 = ___ + ___
 8 = ___ + ___
 6 = ___ + ___
 4 = ___ + ___
 9 = ___ + ___
 8 = ___ + ___
 4 = ___ + ___



2 = ___ + ___
 5 = ___ + ___
 1 = ___ + ___
 7 = ___ + ___
 9 = ___ + ___
 6 = ___ + ___
 8 = ___ + ___
 4 = ___ + ___
 3 = ___ + ___



2

6



3

5

