


Stærðfræði


B - 6



$$3 + _ = 4$$



$$4 + _ = 6$$



$$5 + _ = 7$$



$$1 + _ = 5$$

3 í útilegu



$$2 + \triangle = 3$$

5 í útilegu



$$3 + \triangle = 5$$

6 í útilegu



$$3 + \triangle = 6$$

4 í útilegu

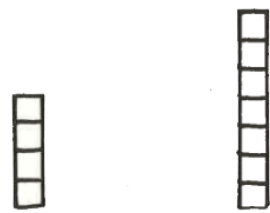


$$3 + \triangle = 4$$


Nafn: _____




$4 + _ = 6$



$4 + _ = 7$



$3 + _ = 5$



$4 + _ = 5$



$3 + _ = 6$



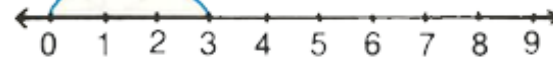
$5 + _ = 7$

Hvað er undir renningnum?
Skrifaðu það á strikin.


| | | | |
|-----|--|---|---|
| 3 + | | = | 6 |
| 5 + | | = | 8 |
| 6 + | | = | 8 |
| 6 + | | = | 7 |
| 5 + | | = | 9 |
| 3 + | | = | 5 |



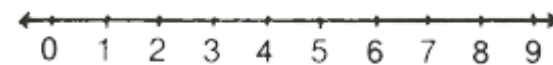
| | | | |
|-----|--|---|---|
| 3 + | | = | 6 |
| 1 + | | = | 5 |
| 6 + | | = | 7 |
| 5 + | | = | 8 |
| 6 + | | = | 7 |
| 5 + | | = | 5 |




$3 + _ = 3$



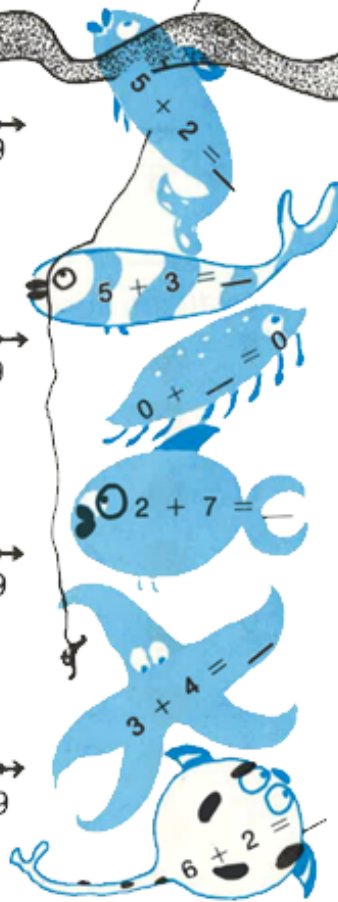
$3 + _ = 5$



$4 + _ = 7$



$1 + _ = 5$



$$3 > \underline{\quad}$$

$$\underline{\quad} > 6$$

$$2 < \underline{\quad}$$

$$\underline{\quad} < 2$$

$$\underline{\quad} < 4$$

$$2 > \underline{\quad}$$

$$\underline{\quad} > 6$$

$$3 = \underline{\quad}$$



$$\underline{\quad} < 5$$

$$\underline{\quad} < 6$$

$$\underline{\quad} = 7$$

$$\underline{\quad} < 3$$

$$\underline{\quad} > 5$$

$$\underline{\quad} > 6$$

$$5 = \underline{\quad}$$

$$2 > \underline{\quad}$$

$$1 + \underline{\quad} = 4$$

$$2 + \underline{\quad} = 3$$

$$2 + \underline{\quad} = 6$$

$$3 + \underline{\quad} = 4$$

$$3 + \underline{\quad} = 9$$

$$1 + \underline{\quad} = 6$$

$$0 + \underline{\quad} = 4$$

$$5 + \underline{\quad} = 8$$

$$6 + \underline{\quad} = 8$$



$$3 + \underline{\quad} = 8$$

$$3 + \underline{\quad} = 9$$

$$1 + \underline{\quad} = 7$$

$$1 + \underline{\quad} = 6$$

$$6 + \underline{\quad} = 7$$

$$1 + \underline{\quad} = 5$$

$$7 + \underline{\quad} = 9$$

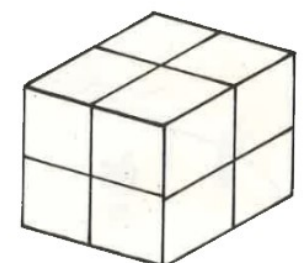

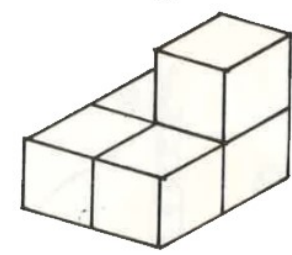
$$2 + \underline{\quad} = 5$$

$$3 + \underline{\quad} = 7$$

Veldu rétt merki

| | > | = | < | |
|-------|-------|-------|---|--|
| 4 ● 2 | 5 ● 1 | 3 ● 0 | | |
| 1 ● 7 | 2 ● 6 | 1 ● 5 | | |
| 6 ● 1 | 8 ● 2 | 2 ● 2 | | |
| 4 ● 4 | 3 ● 5 | 9 ● 5 | | |
| 2 ● 7 | 2 ● 3 | 6 ● 8 | | |
| 3 ● 3 | 5 ● 5 | 1 ● 9 | | |
| 4 ● 3 | 3 ● 2 | 7 ● 7 | | |
| 1 ● 8 | 0 ● 0 | 4 ● 3 | | |

Hve margir?

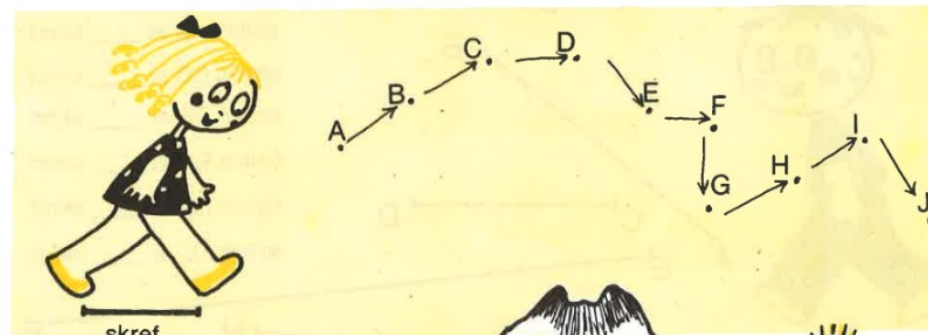


Hvað fara þau mörg skref?

Hve mörg skref er hvert strik?

strikið AB er ___ skref
 strikið CD er ___ skref
 strikið EF er ___ skref
 strikið GH er ___ skref
 strikið IJ er ___ skref
 strikið KL er ___ skref

- 9 gult
- 7 brúnt
- 5 grænt
- 6 svart
- 8 blátt



Svar: ___ skref

Svar: ___ skref