

Stærðfræði

B - 7



Samlagningartafla

4					
3					
5					
+	0	2	1	3	4

Hvað eru þetta margar krónur?



Svar: _____ krónur

- 1 + 3 + 4 = _
- 1 + 7 + 1 = _
- 2 + 0 + 7 = _
- 3 + 0 + 4 = _
- 4 + 2 + 1 = _
- 5 + 1 + 3 = _
- 0 + 2 + 2 = _
- 2 + 3 + 3 = _
- 1 + 3 + 4 = _
- 0 + 3 + 1 = _
- 2 + 3 + 4 = _
- 3 + 2 + 1 = _



$6 < 5 + _$

$8 = _ + 4$

$2 + _ = 5$

$4 + 1 < _$

$7 > 2 + _$

$5 < 2 + _$




3	6	5	8	4	9
<u>+ 3</u>	<u>+ 2</u>	<u>+ 3</u>	<u>+ 1</u>	<u>+ 3</u>	<u>+ 0</u>

6	5	4	3	6
<u>+ 7</u>	<u>+ 7</u>	<u>+ 4</u>	<u>+ 5</u>	<u>+ 9</u>


Nafn: _____

Hve oft getur þú veitt?



Hve margir ganga af?

Hve oft getur þú veitt?



Hve margir ganga af?

Hve oft getur þú veitt?



Hve margir ganga af?

$1 + 1 + 1 = \underline{\quad}$

$1 + 2 + 3 = \underline{\quad}$

$2 + 1 + 2 = \underline{\quad}$

$2 + 5 + 0 = \underline{\quad}$

$1 + 3 + 1 = \underline{\quad}$

$0 + 4 + 0 = \underline{\quad}$

$2 + 0 + 3 = \underline{\quad}$

$1 + 5 + 2 = \underline{\quad}$

$3 + 1 + 1 = \underline{\quad}$

$2 + 2 + 2 = \underline{\quad}$

$5 + 1 + 1 = \underline{\quad}$

$3 + 1 + 3 = \underline{\quad}$

$$1 + 1 \quad 2 + 1 \quad \underline{\quad} + 1 \quad \underline{\quad} + 1 \quad \underline{\quad} + 1 \quad \underline{\quad}$$

$1 + \underline{\quad} = 1$

$7 = 5 + \underline{\quad}$

$2 + \underline{\quad} = 3$

$4 = 3 + \underline{\quad}$

$2 + \underline{\quad} = 6$

$6 = 0 + \underline{\quad}$

$0 + \underline{\quad} = 4$

$5 = 3 + \underline{\quad}$

$3 + \underline{\quad} = 9$


$6 = 3 + \underline{\quad}$


$3 + \underline{\quad} = 8$

$2 = 2 + \underline{\quad}$

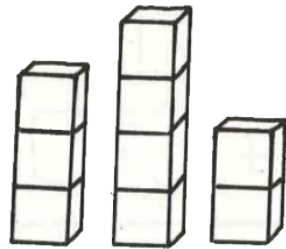
$1 + \underline{\quad} = 6$

$9 = 5 + \underline{\quad}$





$2 + 4 + 3 = \underline{\quad}$



$3 + 4 + 2 = \underline{\quad}$

$3 + 2 + 2 = \underline{\quad}$

$2 + 2 + 3 = \underline{\quad}$

$1 + 5 + 3 = \underline{\quad}$

$3 + 5 + 1 = \underline{\quad}$

$2 + 5 + 1 = \underline{\quad}$

$1 + 5 + 2 = \underline{\quad}$

$3 + 1 + 2 = \underline{\quad}$

$2 + 1 + 3 = \underline{\quad}$


$5 + 0 + 3 = \underline{\quad}$

$3 + 0 + 5 = \underline{\quad}$

$3 + 3 + 0 = \underline{\quad}$

$0 + 3 + 3 = \underline{\quad}$

Hve oft getur þú veitt?




Hve margir ganga af?



Hve oft getur þú veitt?



Hve margir ganga af?

Hér hafa stökin verið þurrkuð út. Teiknaðu þau.





$$2 + 2 + 3$$

7



$$_ + _ + _$$

7



$$1 + 2 + 3$$

6



$$_ + _ + _$$

6



5

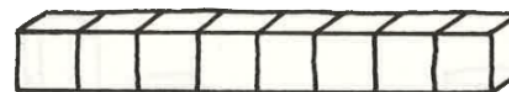


8

$$_ + _ + _$$

$$_ + _ + _$$

Vandaðu þig



$$_ + _ + _$$

$$_ + _ + _$$



$$_ + _ + _$$

$$_ + _ + _$$

$$_ + _ + _$$

$$_ + _ + _$$

$$_ + _ + _$$

$$_ + _ + _$$

$$3 + 4 = _$$

$$2 + 2 = _$$

$$5 + 3 = _$$

$$0 + 2 = _$$

$$3 + 6 = _$$

$$4 + 5 = _$$

$$5 + 0 = _$$

$$3 + 3 = _$$



$$6 = 5 + _$$

$$9 = 3 + _$$

$$7 = 5 + _$$

$$8 = 6 + _$$

$$4 + _ = 6$$

$$3 + _ = 9$$

$$5 + _ = 8$$

$$2 + _ = 7$$