

Veiddu alla fiska sem eru = 19


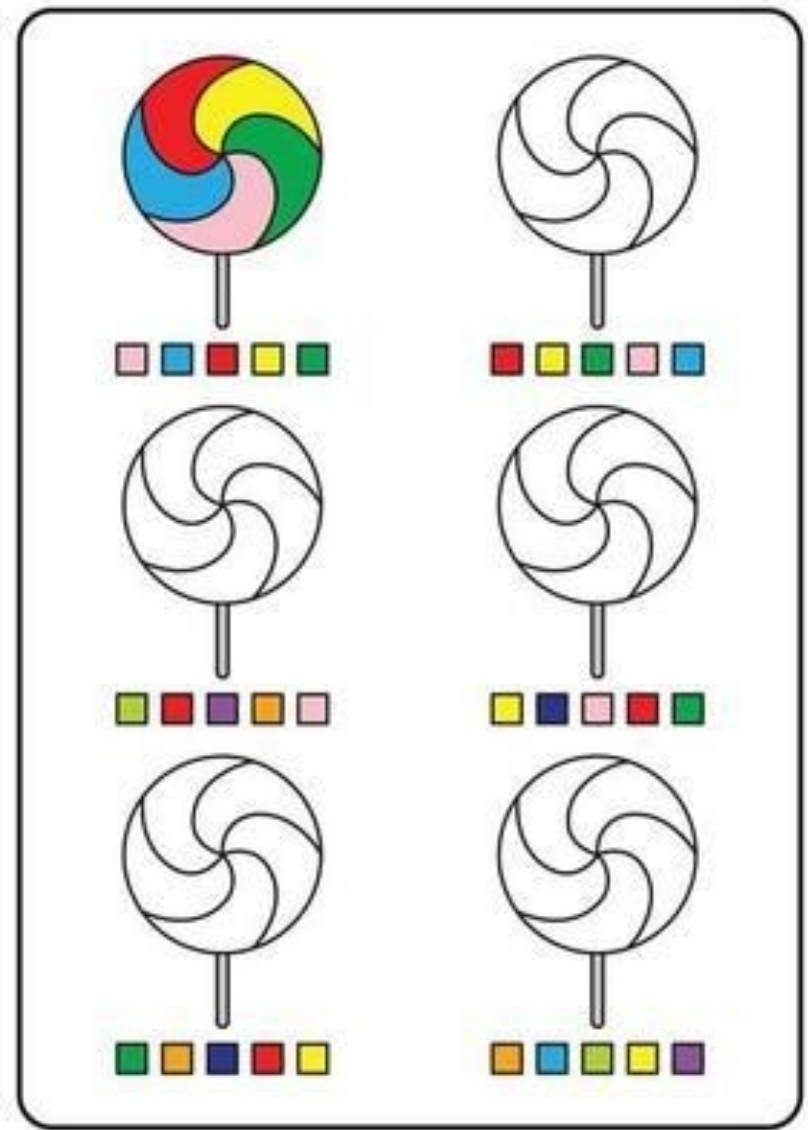



Stærðfræði

48















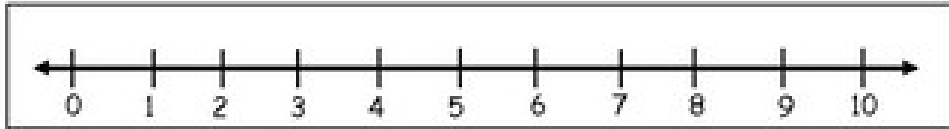
Nafn: _____





+4	+3	+2	+3	+2	+3
3					
+3	+3	+2	+3	+2	+5
2					
+5	+4	+6	-4	-6	+10
5					
+8	+3	-2	-9	+2	+9
9					
+7	+3	+3	-8	-6	+14
7					

 $5 + 5$ 10 9 12	 $8 + 4$ 14 12 10	 $7 + 3$ 9 10 11
 $8 - 6$ 3 4 2	 $10 - 7$ 4 5 3	 $9 - 2$ 8 7 5
 $9 + 5$ 14 16 13	 $5 + 6$ 11 9 12	 $7 + 7$ 12 16 14
 $20 - 10$ 12 10 8	 $13 - 7$ 6 8 9	 $15 - 4$ 12 11 9



-	2
3	
5	
7	
9	
11	
13	
15	
17	
19	

3	+
	2
	4
	6
	8
	10
	12
	14
	16
	17

-	3
4	
6	
8	
10	
12	
14	
16	
18	
20	

