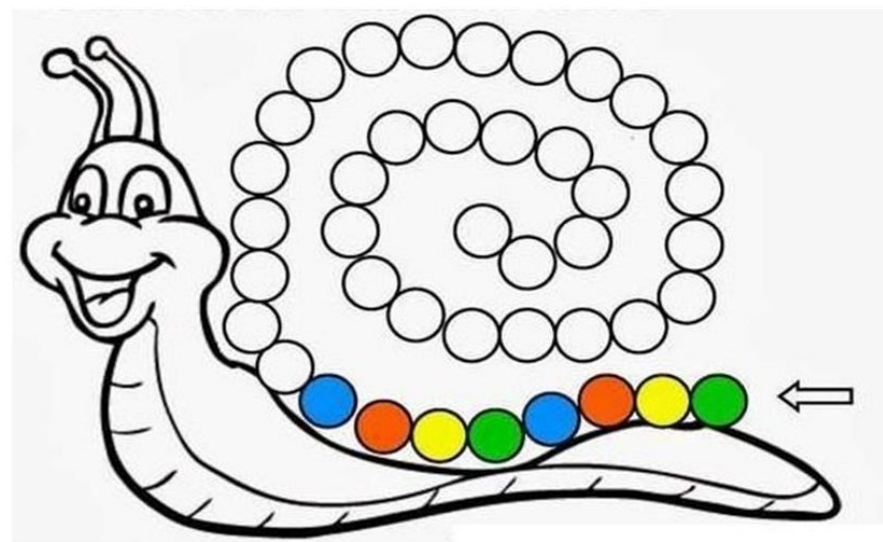


Stærðfræði

50



Nafn: \_\_\_\_\_

$$\text{Blue Bear} = 1$$

$$\text{Pink Pig} = 3$$

$$\text{Orange Rabbit} = 2$$

$$\text{Orange Cat} = 4$$

$$\boxed{\text{Pink Pig}} + \boxed{\text{Blue Bear}} + \boxed{\text{Orange Rabbit}} = \boxed{\phantom{00}}$$

$$\boxed{\text{Orange Cat}} + \boxed{\text{Orange Rabbit}} + \boxed{\text{Pink Pig}} = \boxed{\phantom{00}}$$

$$\boxed{\text{Blue Bear}} + \boxed{\text{Orange Cat}} + \boxed{\text{Pink Pig}} = \boxed{\phantom{00}}$$

$$\boxed{\text{Blue Bear}} + \boxed{\text{Blue Bear}} + \boxed{\text{Orange Rabbit}} = \boxed{\phantom{00}}$$

$$\text{Beagle Dog} = 1$$

$$\text{Corgi Dog} = 3$$

$$\text{Poodle Dog} = 2$$

$$\text{Shaggy Cat} = 4$$

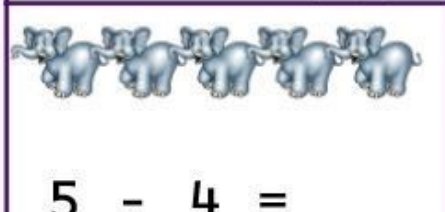
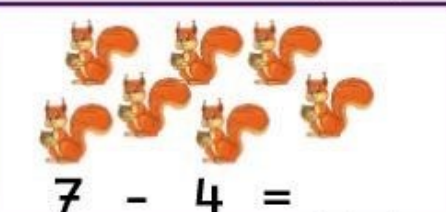
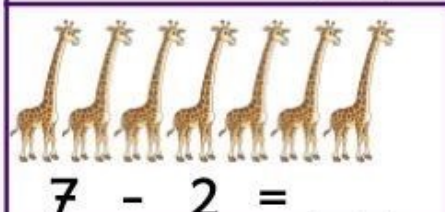

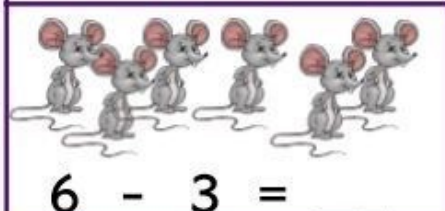


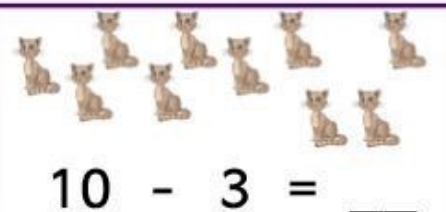
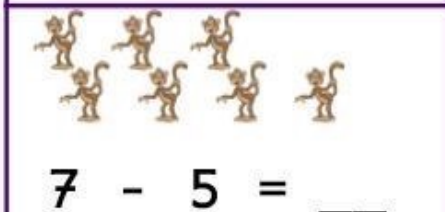

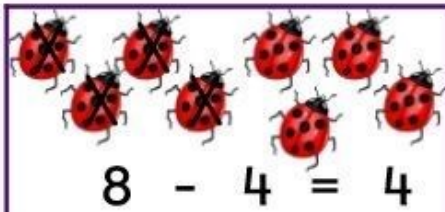
$$\boxed{\text{Corgi Dog}} + \boxed{\text{Shaggy Cat}} - \boxed{\text{Poodle Dog}} = \boxed{\phantom{00}}$$

$$\boxed{\text{Poodle Dog}} + \boxed{\text{Corgi Dog}} + \boxed{\text{Beagle Dog}} = \boxed{\phantom{00}}$$








$$\boxed{\text{Shaggy Cat}} - \boxed{\text{Beagle Dog}} + \boxed{\text{Corgi Dog}} = \boxed{\phantom{00}}$$








$$\boxed{\text{Corgi Dog}} + \boxed{\text{Poodle Dog}} - \boxed{\text{Beagle Dog}} = \boxed{\phantom{00}}$$



































|   |   |   |   |
|---|---|---|---|
|  = 4 |  = 3 |  = 2 |  = 5 |
|---|---|---|---|
















|   |   |   |   |   |   |   |
|---|---|---|---|---|---|---|
|  |  |  |  |  |  |  |
| 2   |   |   |   |   |   |   |

|   |   |   |   |   |   |   |
|---|---|---|---|---|---|---|
|  |  |  |  |  |  |  |
|   |   |   |   |   |   |   |

|   |   |   |   |   |   |   |
|---|---|---|---|---|---|---|
|  |  |  |  |  |  |  |
|   |   |   |   |   |   |   |

|    |    |     |
|---|---|--|
|    |    |    |
|    |    |    |
|   |   |   |
|  |  |  |

|   |      |   |      |   |      |   |      |   |
|---|------|---|------|---|------|---|------|---|
|  | $+2$ |  | $+3$ |  | $-2$ |  | $-2$ |  |
|  | $-2$ |  | $+1$ |  | $+3$ |  | $-2$ |  |
|  | $+1$ |  | $-3$ |  | $-2$ |  | $+4$ |  |

|   |      |   |      |   |      |   |      |   |
|---|------|---|------|---|------|---|------|---|
|   | $+2$ |   | $-1$ |   | $+2$ |   | $-3$ |   |
|  | $+2$ |  | $-5$ |  | $+2$ |  | $+1$ |  |
|  | $-2$ |  | $-2$ |  | $-2$ |  | $+3$ |  |