


Sudoku

11	9	
	10	




$8 + 3 = \underline{\hspace{2cm}}$ $9 + 2 = \underline{\hspace{2cm}}$

$5 + 6 = \underline{\hspace{2cm}}$ $4 + 7 = \underline{\hspace{2cm}}$

Stærðfræði 11-20

11



Nafn: _____

ellefu


$10 + 1 = \underline{\hspace{2cm}}$

$6 + 5 = \underline{\hspace{2cm}}$

$11 + 0 = \underline{\hspace{2cm}}$

$7 + 4 = \underline{\hspace{2cm}}$

Finndu rétta tölu.
Svarið er 11



1 1	1 1	1 1	1 1
1 1	1 1	1 1	1 1

11 8		11 1
11 7	11 0	11 6
11	11 4	11 10
11 5	11 3	11 9


$1 + 10 = \underline{\hspace{2cm}}$

$5 + 6 = \underline{\hspace{2cm}}$

$0 + 11 = \underline{\hspace{2cm}}$



$4 + 7 = \underline{\hspace{2cm}}$


Settu  utan um 11







11





11	16	12	11	15
10	13	14	11	18
11	19	11	14	15
17	12	13	11	10
14	11	18	17	16





<i>tugur</i>		<i>eining</i>	
			
10	<input type="text"/>	13	<input type="text"/>
15	<input type="text"/>	19	<input type="text"/>




<i>tugur</i>		<i>eining</i>	
			
15	<input type="text"/>	19	<input type="text"/>
10	<input type="text"/>		<input type="text"/>






<i>tugur</i>		<i>eining</i>	
			
8	<input type="text"/>	12	<input type="text"/>
16	<input type="text"/>		<input type="text"/>

<i>tugur</i>		<i>eining</i>	
			
14	<input type="text"/>	11	<input type="text"/>
4	<input type="text"/>		<input type="text"/>

	11	<input type="text"/>
	12	<input type="text"/>
	13	<input type="text"/>
	<input type="text"/>	

	12	<input type="text"/>
	13	<input type="text"/>
	14	<input type="text"/>
	<input type="text"/>	

	13	<input type="text"/>
	14	<input type="text"/>
	15	<input type="text"/>

	15	<input type="text"/>
	16	<input type="text"/>
	17	<input type="text"/>
	<input type="text"/>	
	<input type="text"/>	