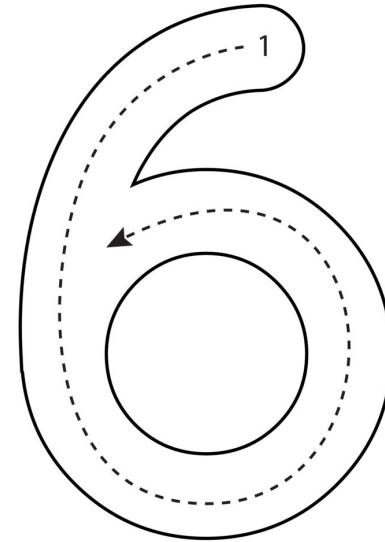


Litaðu allar 6 (sexur)



Stærðfræði

6



6	6	6	6
6	6	6	6

Nafn: \_\_\_\_\_  
Sex

$$6 + 1 = \underline{\quad}$$

$$6 + 2 = \underline{\quad}$$


$$6 + 3 = \underline{\quad}$$

$$6 + 4 = \underline{\quad}$$

$$6 + 5 = \underline{\quad}$$


$$6 + 6 = \underline{\quad}$$

Sexa



6	6	6	6

Sex



6	6	6	6

**Veiddu 6 epli**

**Veiddu 1 Dóru**

**Veiddu 7 mýs**

$6 + 6 = \underline{\quad}$
$5 + 6 = \underline{\quad}$
$4 + 6 = \underline{\quad}$
$3 + 6 = \underline{\quad}$
$2 + 6 = \underline{\quad}$
$1 + 6 = \underline{\quad}$

Settu <input type="radio"/> utan um <b>stærri</b> töluna	
4	6
6	4
8	6
4	9
6	8
7	6
10	2
5	9