



Praut

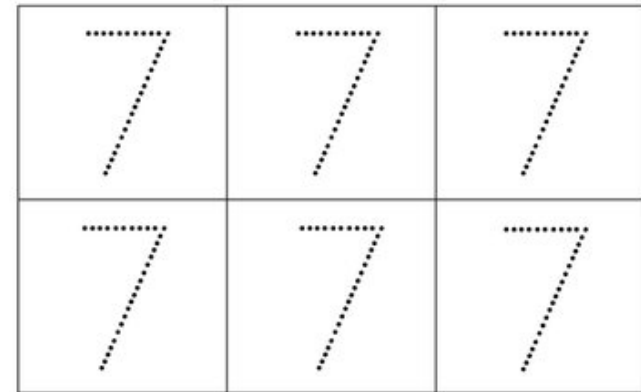
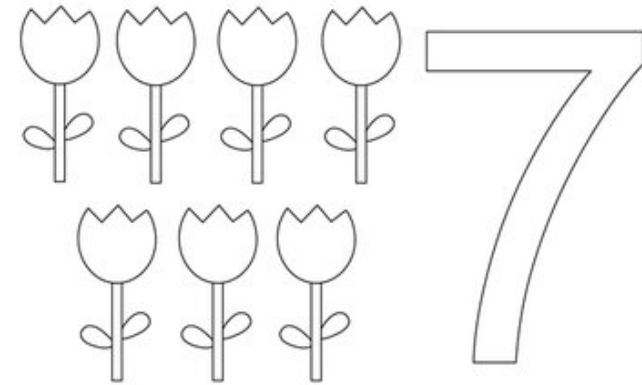


Sjöa



Stærðfræði

7

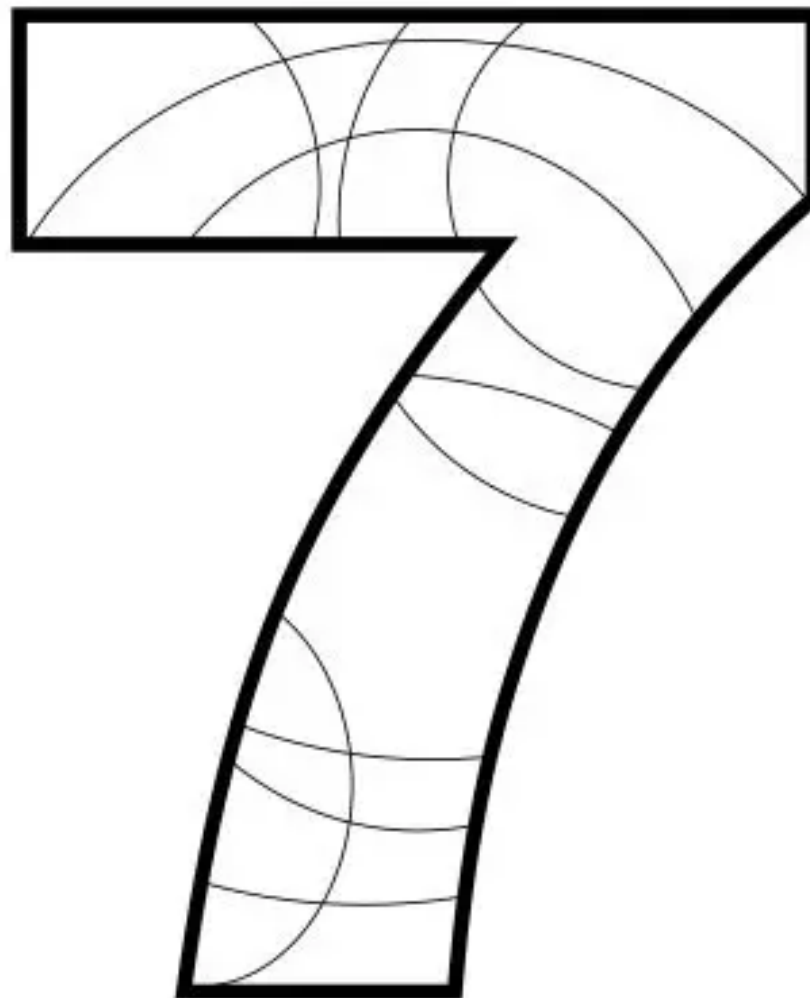


Nafn: _____

Sjö


$7 + 1 = \underline{\quad}$
$7 + 2 = \underline{\quad}$
$7 + 3 = \underline{\quad}$
$7 + 4 = \underline{\quad}$
$7 + 5 = \underline{\quad}$
$7 + 6 = \underline{\quad}$

Litaðu
passaðu að láta sama
litinn ekki vera hlið við



7	7	7	7

Sjö



7	7	7	7

Veiddu 7 ketti

Veiddu 8 blóm

Veiddu 5 hús

$6 + 7 = \underline{\quad}$
$5 + 7 = \underline{\quad}$
$4 + 7 = \underline{\quad}$
$3 + 7 = \underline{\quad}$
$2 + 7 = \underline{\quad}$
$1 + 7 = \underline{\quad}$

Settu <input type="radio"/> utan um stærri töluna	
7	9
8	3
4	7
2	5
10	8
7	0
1	7
5	10