

# Klukka - Tími

Klukkan hefur tvo vísa.

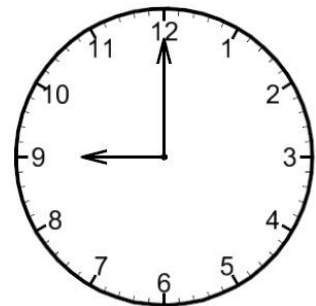
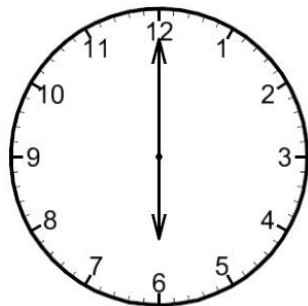
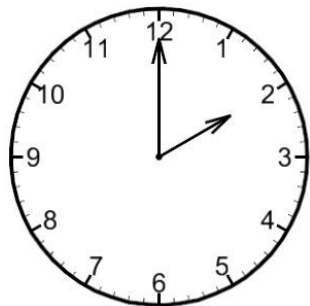



Lítinn vísi sem sýnir klukkutímann.

Stóran vísir sem bendir á mínúturnar.




Skoðu litla vísinn fyrst.

Skoðu síðan stóra vísinn.



Klukkan

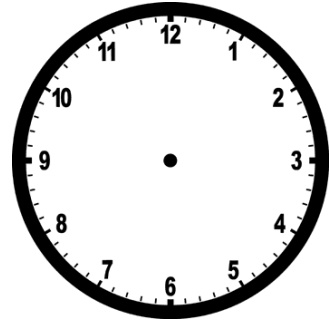


# Klukkutími

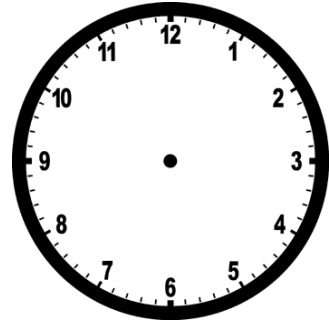
Skrifaðu tímann á tölvuúrið

Teiknaðu vísa á klukkuna

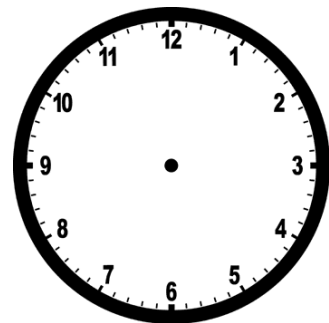
12 - Tólf



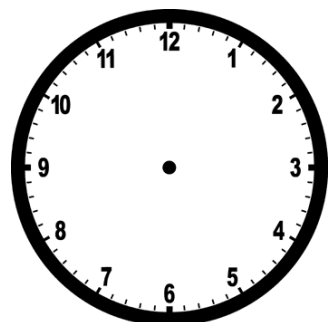
2 - Tvö



4 - Fjögur



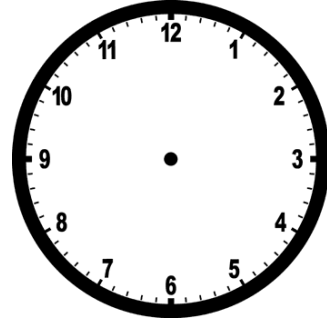
6 - Sex



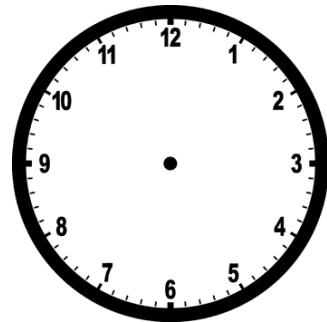
Skrifaðu tímann á tölvuúrið

Teiknaðu vísa á klukkuna

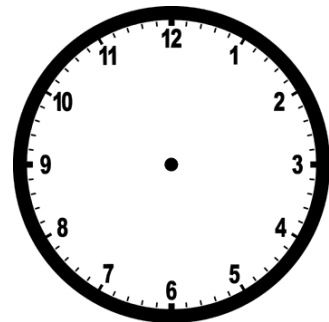
8 - Átta



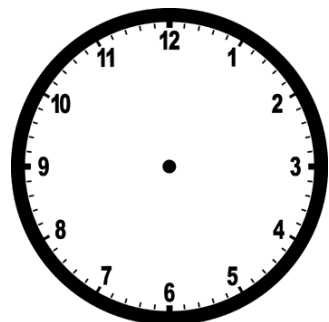
10 - Tíu



1 - Eitt



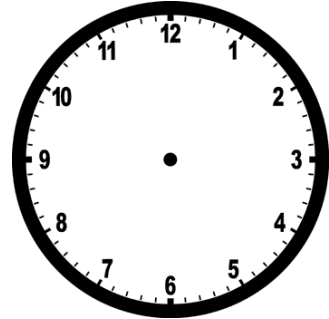
3 - Þrjú



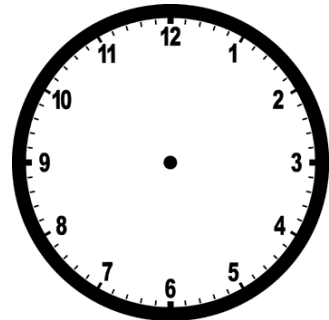
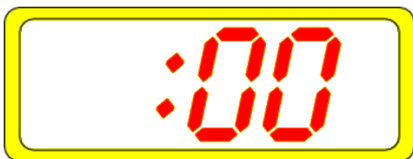
Skrifaðu tímann á tölvuúrið

Teiknaðu vísa á klukkuna

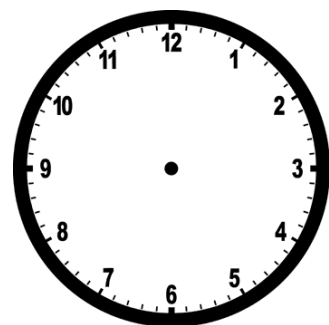
5 - Fimm



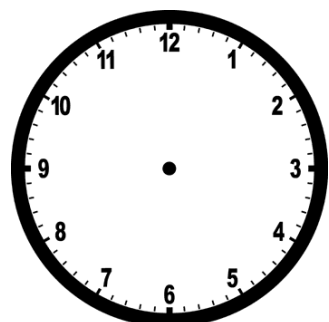
7 - Sjö



9 - Níu



11 - Ellefu




# Hvað er klukkan?

Skoðu litla vísinn fyrst.

Skoðu síðan stóra vísinn.



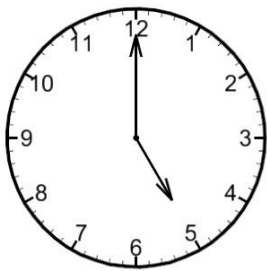
\_\_\_\_\_



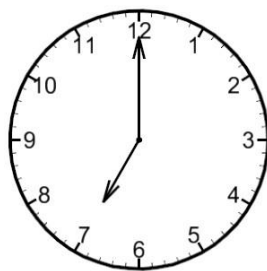
\_\_\_\_\_




\_\_\_\_\_



\_\_\_\_\_

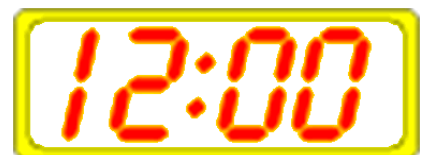





\_\_\_\_\_

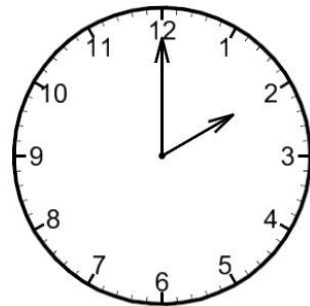
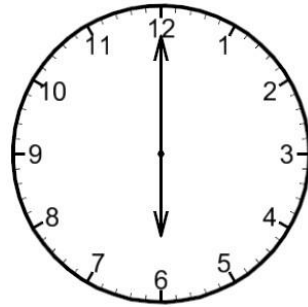

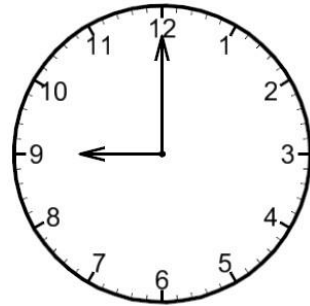


\_\_\_\_\_

Paraðu saman klukkurnar







Einum tíma fyrr





Einum tíma fyrr



# Hálftími

Stóri vísirinn segir frá mínútunum.

Þegar stóri vísirinn bendir á 6 segjum við að klukkan sé hálf eða 30 mínútur yfir. Stóri vísirinn er hálfnaður með hringinn.

Stóri vísirinn er á milli 2 og 3

Litli vísirinn er á 30



Hálf 3

2:30



Hálf \_\_\_\_\_

\_\_\_\_\_ : \_\_\_\_\_



Hálf \_\_\_\_\_

\_\_\_\_\_ : \_\_\_\_\_



Hálf \_\_\_\_\_

\_\_\_\_\_ : \_\_\_\_\_



Hálf \_\_\_\_\_


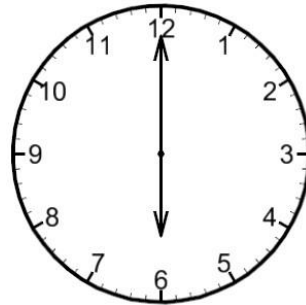

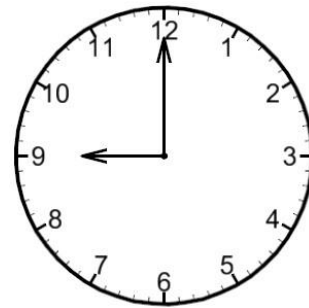
\_\_\_\_\_ : \_\_\_\_\_



Hálf \_\_\_\_\_

\_\_\_\_\_ : \_\_\_\_\_

# Einum tíma á eftir



Einum tíma á eftir

