



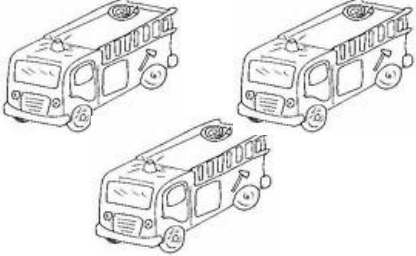






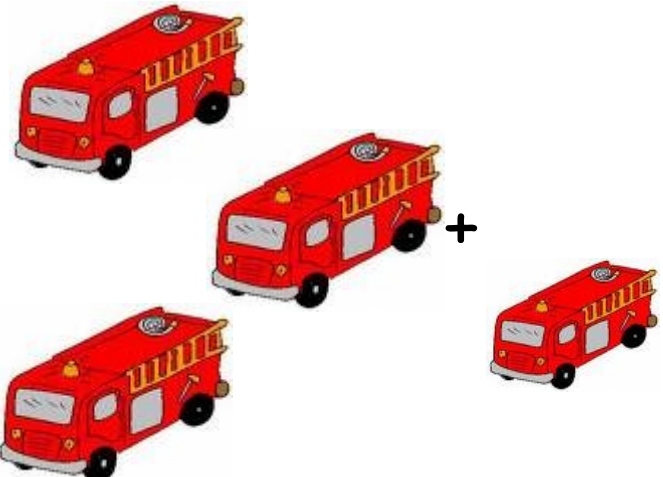
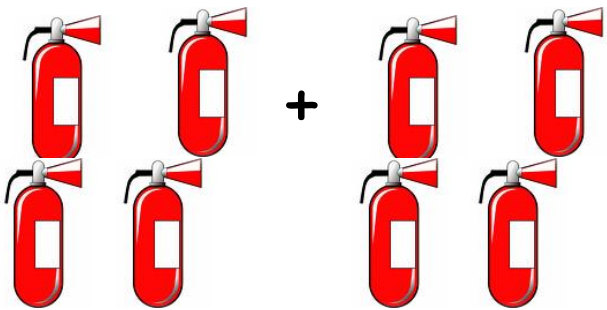
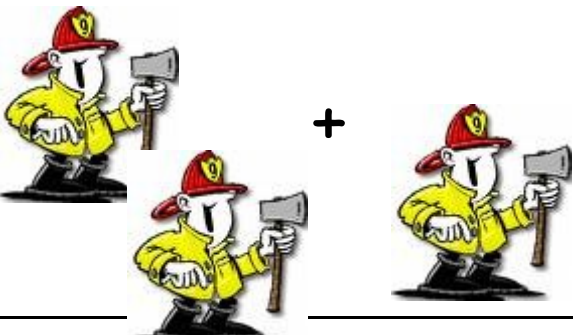
| | |
|--|---|
|  <p>1 2 3 4 5 6 7 8</p> |  <p>1 2 3 4 5 6 7 8</p> |
|  <p>2 3 4 5 6 7 8 9</p> |  <p>1 2 3 4 5 6 7 8</p> |
|  <p>1 2 3 4 5 6 7 8</p> |  <p>1 2 3 4 5 6 7 8</p> |
|  <p>1 2 3 4 5 6 7 8</p> |  <p>2 3 4 5 6 7 8 9</p> |


Stærðfræði

20



Nafn: _____

| |
|---|
|  $3 + 1 = \underline{\quad}$ |
|  $4 + 4 = \underline{\quad}$ |
|  $3 + 1 = \underline{\quad}$ |

Settu utan um minni töluna 

| | |
|---|---|
| 6 | 1 |
| 8 | 3 |
| 4 | 9 |
| 5 | 2 |
| 7 | 1 |
| 6 | 4 |
| 3 | 9 |
| 5 | 2 |



| | | | |
|---|---|---|---|
| 0 | 0 | 1 | 1 |
| | | | |




| | | | |
|---|---|---|---|
| 2 | 2 | 3 | 3 |
| | | | |

Settu utan um þá sem eru fleiri.



| | |
|--|--|
| | |
| | |
| | |

Settu utan um þá sem eru færri..



Settu utan um stærri töluna

| | |
|---|---|
| 2 | 8 |
| 5 | 7 |
| 1 | 5 |
| 3 | 9 |
| 8 | 1 |
| 7 | 3 |
| 6 | 2 |
| 2 | 9 |

